


Dear 2nd Graders and Parents,

Enclosed is the summer skills packet for your child to complete during summer vacation and the supply list for Grade 2. The summer skills packet consists of 2 book reports, reading comprehension, and addition/subtraction review. If you are interested, Summer Bridge workbooks, are another excellent resource for parents that are looking for extra reinforcement of skills. The packets need to be returned the first day of school and will be reviewed by Mrs. Quinn.

We hope you have an enjoyable and relaxing summer!!

Mrs. Perry



Visiting Grandma & Grandpa

main idea
and details

Read.


My family likes to visit my grandma and grandpa. They live far away. When we get there, we hug and hug.

My grandpa likes to play with us. He lets us color in his office. He also likes to make bread. We help Grandpa knead the dough.

My grandma keeps lots of cookies and treats in the house. She has lots of books, too. Grandma reads to us all day long.

We love to go swimming at Grandma and Grandpa's beach. We bring our rafts and our towels. We can swim all day. Sometimes we have a picnic. At night, we have a campfire.

Grandma and Grandpa love it when we visit. They are lonely when we are gone. When we drive home, we talk about what we did. I can't wait until we visit again!




Answer the questions.

1. What is the main idea of the story?

2. What do the kids do with their grandma?

3. What do the kids do with their grandpa?



Ants

Read.

Ants are insects. They have three body parts. Ants also have six legs. They have antennae. Some ants are black and some are red. There are big ants and little ants.



Ants work hard. They work together. Each ant has a different job. Some ants carry sand. Some ants get food. The queen ant has lots of babies. Other ants take care of baby ants. Ants are very strong. They are hard workers.

Draw an ant. Use the details from the article.

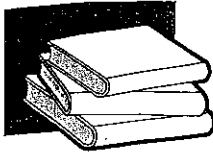
Complete the sentences.

1. Ants have different _____

2. Some ants carry _____


3. The queen ant has many _____

4. Some ants take care of _____



Bees

cause and effect



Read.

Bees have two pairs of wings that move up and down very fast. The wings make a buzzing sound. Bees fly to flowers to get nectar and pollen. Nectar is used to make honey. Bees eat the honey. Pollen is a powder that helps flowers make seeds. The seeds make new flowers. Bees are helpful, but watch out! The female bee can sting. Ouch!

Answer the questions.

1. What causes a bee to buzz?




2. Why does a bee fly to flowers?

3. What is the effect of bees collecting nectar?

4. What is the effect of bees spreading pollen?

5. How can a female bee hurt you?

Trace the path of the bee from its hive to the flower.


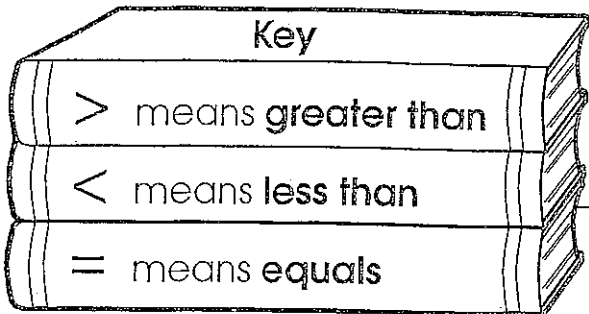


Name _____

Comparing Numbers
Using symbols: >, <, =


Out of Reach

Write >, <, or = to make a number sentence.



A. 15 ○ 17	B. 20 ○ 18	C. 5 ○ 5
D. 10 ○ 10	E. 12 ○ 15	F. 19 ○ 20
G. 15 ○ 11	H. 8 ○ 6	I. 12 ○ 9
J. 3 ○ 9		K. 1 ○ 5
L. 8 ○ 8		M. 16 ○ 13
N. 7 ○ 5		O. 8 ○ 12
P. 10 ○ 16		Q. 11 ○ 11
R. 13 ○ 9	S. 9 ○ 6	T. 13 ○ 20
U. 3 ○ 0	V. 11 ○ 13	W. 6 ○ 9
X. 16 ○ 16	Y. 14 ○ 8	Z. 19 ○ 19

3 Numbers



Name: _____

$2 + 6 + 9 = \square$

$1 + 7 + 3 = \square$

$1 + 5 + 9 = \square$

$2 + 6 + 6 = \square$

$9 + 6 + 2 = \square$

$9 + 6 + 4 = \square$

$4 + 9 + 6 = \square$

$5 + 3 + 6 = \square$

$2 + 5 + 1 = \square$

$9 + 7 + 2 = \square$

$2 + 2 + 6 = \square$

$7 + 4 + 6 = \square$

$4 + 2 + 8 = \square$

$3 + 3 + 5 = \square$

$5 + 3 + 7 = \square$

$2 + 5 + 3 = \square$



d:

a.

$$\begin{array}{r} 9 \\ + 1 \\ \hline \end{array}$$

b.

$$\begin{array}{r} 5 \\ + 2 \\ \hline \end{array}$$

c.

$$\begin{array}{r} 5 \\ + 5 \\ \hline \end{array}$$

d.

$$\begin{array}{r} 2 \\ + 7 \\ \hline \end{array}$$

e.

$$\begin{array}{r} 8 \\ + 3 \\ \hline \end{array}$$

f.

$$\begin{array}{r} 6 \\ + 4 \\ \hline \end{array}$$

$$\begin{array}{r} 7 \\ + 6 \\ \hline \end{array}$$

$$\begin{array}{r} 4 \\ + 9 \\ \hline \end{array}$$

$$\begin{array}{r} 7 \\ + 5 \\ \hline \end{array}$$

$$\begin{array}{r} 3 \\ + 7 \\ \hline \end{array}$$

$$\begin{array}{r} 1 \\ + 8 \\ \hline \end{array}$$

$$\begin{array}{r} 8 \\ + 5 \\ \hline \end{array}$$

$$\begin{array}{r} 5 \\ + 1 \\ \hline \end{array}$$

$$\begin{array}{r} 6 \\ + 3 \\ \hline \end{array}$$

$$\begin{array}{r} 4 \\ + 8 \\ \hline \end{array}$$

$$\begin{array}{r} 3 \\ + 9 \\ \hline \end{array}$$

$$\begin{array}{r} 5 \\ + 7 \\ \hline \end{array}$$

$$\begin{array}{r} 7 \\ + 1 \\ \hline \end{array}$$

$$\begin{array}{r} 6 \\ + 5 \\ \hline \end{array}$$

$$\begin{array}{r} 6 \\ + 6 \\ \hline \end{array}$$

$$\begin{array}{r} 2 \\ + 8 \\ \hline \end{array}$$

$$\begin{array}{r} 3 \\ + 5 \\ \hline \end{array}$$

$$\begin{array}{r} 9 \\ + 2 \\ \hline \end{array}$$

$$\begin{array}{r} 5 \\ + 6 \\ \hline \end{array}$$

$$\begin{array}{r} 6 \\ + 7 \\ \hline \end{array}$$

$$\begin{array}{r} 2 \\ + 6 \\ \hline \end{array}$$

$$\begin{array}{r} 6 \\ + 1 \\ \hline \end{array}$$

$$\begin{array}{r} 5 \\ + 8 \\ \hline \end{array}$$

$$\begin{array}{r} 7 \\ + 4 \\ \hline \end{array}$$

$$\begin{array}{r} 4 \\ + 5 \\ \hline \end{array}$$

$$\begin{array}{r} 1 \\ + 5 \\ \hline \end{array}$$

$$\begin{array}{r} 6 \\ + 2 \\ \hline \end{array}$$

$$\begin{array}{r} 2 \\ + 9 \\ \hline \end{array}$$

$$\begin{array}{r} 9 \\ + 3 \\ \hline \end{array}$$


$$\begin{array}{r} 8 \\ + 2 \\ \hline \end{array}$$

$$\begin{array}{r} 1 \\ + 6 \\ \hline \end{array}$$

Name _____

Race Ahead

Add. Then, color each square with a sum equal to 10 to race the car to the flag.



	$\begin{array}{r} 5 \\ + 5 \\ \hline \end{array}$	$\begin{array}{r} 4 \\ + 3 \\ \hline \end{array}$	$\begin{array}{r} 8 \\ + 7 \\ \hline \end{array}$	$\begin{array}{r} 2 \\ + 6 \\ \hline \end{array}$
$\begin{array}{r} 7 \\ + 7 \\ \hline \end{array}$	$\begin{array}{r} 3 \\ + 7 \\ \hline \end{array}$	$\begin{array}{r} 9 \\ + 1 \\ \hline \end{array}$	$\begin{array}{r} 9 \\ + 8 \\ \hline \end{array}$	$\begin{array}{r} 4 \\ + 5 \\ \hline \end{array}$
$\begin{array}{r} 8 \\ + 8 \\ \hline \end{array}$	$\begin{array}{r} 5 \\ + 3 \\ \hline \end{array}$	$\begin{array}{r} 6 \\ + 4 \\ \hline \end{array}$	$\begin{array}{r} 9 \\ + 9 \\ \hline \end{array}$	$\begin{array}{r} 2 \\ + 7 \\ \hline \end{array}$
$\begin{array}{r} 5 \\ + 6 \\ \hline \end{array}$	$\begin{array}{r} 7 \\ + 3 \\ \hline \end{array}$	$\begin{array}{r} 2 \\ + 8 \\ \hline \end{array}$	$\begin{array}{r} 3 \\ + 8 \\ \hline \end{array}$	$\begin{array}{r} 7 \\ + 9 \\ \hline \end{array}$
$\begin{array}{r} 7 \\ + 8 \\ \hline \end{array}$	$\begin{array}{r} 1 \\ + 9 \\ \hline \end{array}$	$\begin{array}{r} 6 \\ + 9 \\ \hline \end{array}$	$\begin{array}{r} 7 \\ + 4 \\ \hline \end{array}$	
$\begin{array}{r} 9 \\ + 6 \\ \hline \end{array}$	$\begin{array}{r} 4 \\ + 6 \\ \hline \end{array}$	$\begin{array}{r} 8 \\ + 2 \\ \hline \end{array}$	$\begin{array}{r} 5 \\ + 5 \\ \hline \end{array}$	

Name _____

Subtract as fast as you can.

$$\begin{array}{r} \textcircled{1} \quad 6 \quad 9 \quad 10 \quad 4 \quad 7 \quad 10 \quad 8 \quad 12 \\ \quad -5 \quad -6 \quad -4 \quad -3 \quad -5 \quad -9 \quad -3 \quad -10 \end{array}$$

$$\begin{array}{r} \textcircled{2} \quad 5 \quad 11 \quad 9 \quad 4 \quad 12 \quad 8 \quad 6 \quad 12 \\ \quad -3 \quad -10 \quad -5 \quad -2 \quad -12 \quad -1 \quad -3 \quad -7 \end{array}$$

$$\begin{array}{r} \textcircled{3} \quad 11 \quad 2 \quad 8 \quad 11 \quad 12 \quad 9 \quad 7 \quad 10 \\ \quad -6 \quad -0 \quad -5 \quad -5 \quad -4 \quad -4 \quad -1 \quad -2 \end{array}$$

$$\begin{array}{r} \textcircled{4} \quad 9 \quad 10 \quad 11 \quad 11 \quad 8 \quad 10 \quad 12 \quad 11 \\ \quad -3 \quad -8 \quad -7 \quad -4 \quad -2 \quad -6 \quad -5 \quad -1 \end{array}$$

$$\begin{array}{r} \textcircled{5} \quad 12 \quad 7 \quad 9 \quad 8 \quad 4 \quad 6 \quad 12 \quad 6 \\ \quad -2 \quad -4 \quad -7 \quad -6 \quad -4 \quad -2 \quad -1 \quad -4 \end{array}$$

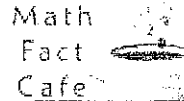
$$\begin{array}{r} \textcircled{6} \quad 12 \quad 5 \quad 9 \quad 12 \quad 7 \quad 12 \quad 5 \quad 10 \\ \quad -4 \quad -2 \quad -2 \quad -6 \quad -6 \quad -3 \quad -4 \quad -5 \end{array}$$

$$\begin{array}{r} \textcircled{7} \quad 11 \quad 7 \quad 8 \quad 12 \quad 7 \quad 10 \quad 7 \quad 12 \\ \quad -2 \quad -2 \quad -4 \quad -8 \quad -3 \quad -7 \quad -7 \quad -11 \end{array}$$

Score: _____

Date: _____

Name: _____



© Copyright 2000-2009 Math Fact Cafe, LLC. All rights reserved.

$$\begin{array}{r} 6 \\ - 3 \\ \hline \end{array}$$

$$\begin{array}{r} 5 \\ + 2 \\ \hline \end{array}$$

$$\begin{array}{r} 8 \\ - 0 \\ \hline \end{array}$$

$$\begin{array}{r} 11 \\ + 0 \\ \hline \end{array}$$

$$\begin{array}{r} 8 \\ + 6 \\ \hline \end{array}$$

$$\begin{array}{r} 8 \\ - 1 \\ \hline \end{array}$$

$$\begin{array}{r} 1 \\ + 11 \\ \hline \end{array}$$

$$\begin{array}{r} 2 \\ + 2 \\ \hline \end{array}$$

$$\begin{array}{r} 3 \\ - 1 \\ \hline \end{array}$$

$$\begin{array}{r} 5 \\ - 3 \\ \hline \end{array}$$

$$\begin{array}{r} 9 \\ - 6 \\ \hline \end{array}$$

$$\begin{array}{r} 5 \\ + 3 \\ \hline \end{array}$$

$$\begin{array}{r} 1 \\ + 2 \\ \hline \end{array}$$

$$\begin{array}{r} 7 \\ + 8 \\ \hline \end{array}$$

$$\begin{array}{r} 11 \\ - 5 \\ \hline \end{array}$$

$$\begin{array}{r} 12 \\ - 11 \\ \hline \end{array}$$

$$\begin{array}{r} 2 \\ + 0 \\ \hline \end{array}$$

$$\begin{array}{r} 12 \\ - 2 \\ \hline \end{array}$$

$$\begin{array}{r} 6 \\ - 2 \\ \hline \end{array}$$

$$\begin{array}{r} 8 \\ - 3 \\ \hline \end{array}$$

$$\begin{array}{r} 5 \\ + 5 \\ \hline \end{array}$$

$$\begin{array}{r} 0 \\ + 10 \\ \hline \end{array}$$

$$\begin{array}{r} 3 \\ + 9 \\ \hline \end{array}$$

$$\begin{array}{r} 11 \\ - 5 \\ \hline \end{array}$$

$$\begin{array}{r} 10 \\ - 5 \\ \hline \end{array}$$

$$\begin{array}{r} 10 \\ - 7 \\ \hline \end{array}$$

$$\begin{array}{r} 1 \\ + 10 \\ \hline \end{array}$$

$$\begin{array}{r} 10 \\ - 3 \\ \hline \end{array}$$

$$\begin{array}{r} 11 \\ - 2 \\ \hline \end{array}$$

$$\begin{array}{r} 4 \\ - 0 \\ \hline \end{array}$$

Title _____

Author _____

Characters

Setting

Beginning

Middle

End

4

Title _____

Author _____

Characters

Setting

Beginning

Middle

End

46